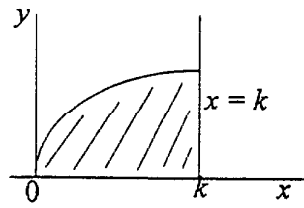


SECTION A

1. (i) (a)



(A1)

$$(b) \quad \text{Area} = \int_0^k \sin x dx = [-\cos x]_0^k = 1 - \cos k \quad (M1)(A1)$$

$$(c) \quad \text{Volume required} = \pi \int_0^k \sin^2 x dx = \pi \int_0^k \frac{1 - \cos 2x}{2} dx \quad (M1)(A1)$$

$$= \frac{\pi}{2} \left[\left(x - \frac{\sin 2x}{2} \right) \right]_0^k = \frac{\pi}{4} (2k - \sin 2k) \quad (M1)(A1)$$

(ii) The random variable X has a hypergeometric distribution.

$$E(X) = \frac{(3)(4)}{10} = \frac{12}{10} = \frac{6}{5} = 1.2 \quad (M1)(A1)$$

$$V(X) = \frac{4(10-4)3(10-3)}{10^2(10-1)} = \frac{(24)(21)}{(100)(9)} = \frac{14}{25} = 0.56 \quad (M1)(A1)$$

$$\text{Thus, } E(X) = \frac{6}{5} = 1.2$$

$$V(X) = \frac{14}{25} = 0.56$$

$$E(X) = \frac{nK}{N}$$

$$\sigma^2 = \frac{nK(N-K)(N-n)}{N^2(N-1)}$$

several will do it differently

$$E(X) = \sum xP(x) = \frac{1 \cdot 60 + 2 \cdot 36 + 3 \cdot 4}{120} = 1.2$$

$$V(X) = \sum x^2 P(x) - \mu^2 = \frac{1 \cdot 60 + 4 \cdot 36 + 9 \cdot 4}{120} - 1.2^2$$

$$= \boxed{0.56}$$

$$\sigma(X) = \frac{.748}{}$$

(iii) Let X be the number of defective bulbs, p be the probability of finding a defective bulb.

X is a binomial random variable.

sample size $n = 200$

$p = 0.1$

$E(X) = np = 20$

$$\begin{aligned} \text{Standard deviation of } X &= \sqrt{(200)(0.1)(0.9)} = \sqrt{18} \\ &= \cancel{4.24} \end{aligned} \quad (M1)(A2)$$

We want the probability that in a random sample of 200 bulbs more than 24, i.e. 25 or more, are defective.

Using continuity correction, we want to find $p(Y \geq 24.5)$ where Y is normally distributed with mean 2.0 and standard deviation 4.24. (M1)

Hence $p(X > 24) = p(Y \geq 24.5)$

$$= p\left(z \geq \frac{24.5 - 20}{4.24}\right) = p(z \geq 1.061)$$

$$= 0.144 \text{ (3 significant figures)} \quad (M1)(A1)$$

2. (i) The successive distance through which the ball falls form a geometric sequence with first term 81 and the common ratio $\frac{2}{3}$.

- (a) The maximum height of the ball between the fifth and the sixth bounce is

$$(81)\left(\frac{2}{3}\right)^5 = \frac{32}{3} \text{ metre.} \quad (M2)(A1)$$

- (b) The total distance traveled by the ball from the time it is dropped until it strikes the ground the sixth time is

$$\begin{aligned} \sum_{n=0}^5 81\left(\frac{2}{3}\right)^n + \sum_{n=0}^4 81\left(\frac{2}{3}\right)\left(\frac{2}{3}\right)^n \\ = \frac{81\left(1-\left(\frac{2}{3}\right)^6\right)}{1-\frac{2}{3}} + \frac{54\left(1-\left(\frac{2}{3}\right)^5\right)}{1-\frac{2}{3}} \\ = \frac{665}{3} + \frac{422}{3} = \frac{1087}{3} = 362\frac{1}{3} \text{ metres} \quad (M2)(A2) \end{aligned}$$

Note: Some candidates may calculate the total distance as follows:

$$\begin{aligned} \text{Total distance} &= 81 + 2 \times \left\{ 54 + 54\left(\frac{2}{3}\right) + 54\left(\frac{2}{3}\right)^2 + 54\left(\frac{2}{3}\right)^3 + 54\left(\frac{2}{3}\right)^4 \right\} \\ &= 81 + 108 \left(\frac{1-\left(\frac{2}{3}\right)^5}{1-\frac{2}{3}} \right) = 81 + 324 \left(\frac{243-42}{243} \right) \\ &= 81 + 281\frac{1}{3} = 362\frac{1}{3} \text{ metres} \quad \text{Award (M2)(A2)} \end{aligned}$$

- (c) If the ball continues to bounce indefinitely, then the distance traveled is

$$\begin{aligned} \sum_0^{\infty} 81 \left(\frac{2}{3}\right)^n + \sum_0^{\infty} 81 \left(\frac{2}{3}\right) \left(\frac{2}{3}\right)^n \\ = \frac{81}{1-\frac{2}{3}} + \frac{54}{1-\frac{2}{3}} = 243 + 162 = 405 \text{ metres} \end{aligned} \quad (M2)(A1)$$

Note: Some candidates may also mention distance traveled

$$\begin{aligned} &= 81 + 108 \left(1 + \frac{2}{3} + \dots\right) \\ &= 81 + 108 \left(\frac{1}{1-\frac{1}{3}}\right) = 81 + 324 \\ &= 405 \text{ metres} \end{aligned} \quad \text{Award (M2)(A1)}$$

(ii) FIRST METHOD

Let the three numbers in arithmetic progression be $x, x+r, x+2r$. Their sum is

$$x + (x+r) + (x+2r) = 3x + 3r = 24$$

$$\text{Hence } x+r=8 \text{ or } r=8-x \quad (M1)(A1)$$

We are also given that $x-1, x+r-2$ and $x+2r$ are in geometric progression. So

$$\frac{x+r-2}{x-1} = \frac{x+2r}{x+r-2}$$

$$\text{or } (x+r-2)^2 = (x-1)(x+2r). \quad (M1)(A1)$$

Substituting $x+r=8$ and $r=8-x$, we get

$$(8-2)^2 = (x-1)\{x+2(8-x)\}$$

$$\text{or } (x-1)(16-x) = 36$$

$$\text{or } -x^2 + 17x - 16 = 36$$

$$\text{or } x^2 - 17x + 52 = 0$$

$$\text{or } (x-13)(x-4) = 0$$

Hence, $x = 13$ or 4

(M1)(A1)

The solutions are obtained by taking $x = 13, r = 8 - 13 = -5$ and $x = 4, r = 4$.

So there are two sets of solutions

viz. $13, 8, 3$ and $4, 8, 12$

(R1)(R1)

SECOND METHOD

Since the three numbers are in arithmetic progression with sum equal to 24, let the numbers be $8 - x, 8, 8 + x$.

(M1)(A1)

From these we form the new numbers $7 - x, 6, 8 + x$ which are in geometric progression.

Hence $(7 - x)(8 + x) = 6^2$

(M1)(A1)

We get $x^2 + x - 20 = 0$ i.e. $(x + 5)(x - 4) = 0$

Hence, $x = -5$ or $x = 4$

(M1)(A1)

When $x = 4$, the numbers are $4, 8, 12$
and when $x = -5$, the numbers are $13, 8, 3$

(M1)(A1)

3. (a) Line L_1 passes through $(2, 3, 7)$ and is parallel to $\vec{v} = 3\vec{i} + \vec{j} + 3\vec{k}$.

Hence the parametric equation of the line is

$$\vec{r} = x\vec{i} + y\vec{j} + z\vec{k} = (2\vec{i} + 3\vec{j} + 7\vec{k}) + t(3\vec{i} + \vec{j} + 3\vec{k}), \quad -\infty < t < \infty \quad (M2)(A1)$$

- (b) $x = 2 + 3t, y = 3 + t, z = 7 + 3t$ is any point on the line. To find the point of intersection of the line and the plane $2x + 3y - 4z + 21 = 0$. Substitute $x = 2 + 3t, y = 3 + t, z = 7 + 3t$ in the equation of the plane and we get

$$2(2 + 3t) + 3(3 + t) - 4(7 + 3t) + 21 = 0$$

$$\text{or} \quad 4 + 9 - 28 + (6 + 3 - 12)t + 21 = 0$$

$$\text{or} \quad -3t = -6 \text{ or } t = 2 \quad \checkmark \quad (M1)(A1)$$

Hence the point of intersection is $(8, 5, 13)$. (A1)

- (c) Let E_1 be the plane which passes through the point $(1, 2, 3)$ and parallel to the plane $2x + 3y - 4z + 21 = 0$. Normal to E_1 is $2\vec{i} + 3\vec{j} - 4\vec{k}$. (M1)

Since $(1, 2, 3)$ lies on E_1 , the equation of the plane E_1 is

$$2(x - 1) + 3(y - 2) - 4(z - 3) = 0 \quad (M1)$$

$$\text{or} \quad 2x + 3y - 4z + 4 = 0 \quad (A1)$$

- (d) (i) L_2 has equation $x = t, y = t$ and $z = -t, -\infty < t < \infty$.

Hence L_2 is parallel to the vector $\vec{i} + \vec{j} - \vec{k}$.

Since L_1 is parallel to the vector $3\vec{i} + \vec{j} + 3\vec{k}$, L_1 is not parallel to L_2 . (M1)(R1)

- (ii) A point on the line L_2 is given by $x = s, y = s$ and $z = -s, -\infty < s < \infty$. If L_1 intersects L_2 , then the equations

$$2 + 3t = s \quad (1)$$

$$3 + t = s \quad (2)$$

$$7 + 3t = -s \quad (3)$$

will hold.

From (2) and (3) $10 + 4t = 0$ or $t = -\frac{5}{2}$. But from (1) and (2) $2t - 1 = 0$ or $t = \frac{1}{2}$.

Thus the system of equations (1), (2) and (3) are inconsistent. Hence L_1 does not intersect L_2 .

(M1)(R1)

- (e) (i) L_2 is parallel to the vector $w = \vec{i} + \vec{j} - \vec{k}$. (A1)

- (ii) $\vec{PO} = \vec{i} - 2\vec{j} - 4\vec{k}$ (A1)

- (iii) $\vec{v} \times \vec{w} = \begin{vmatrix} \vec{i} & \vec{j} & \vec{k} \\ 3 & 1 & 3 \\ 1 & 1 & -1 \end{vmatrix} = -4\vec{i} + 6\vec{j} + 2\vec{k}$ (M1)(A1)

$$|\vec{v} \times \vec{w}| = |-4\vec{i} + 6\vec{j} + 2\vec{k}| = \sqrt{56} \quad (A1)$$

$$\text{Hence, } d = \frac{|\vec{PO} \cdot (\vec{v} \times \vec{w})|}{|\vec{v} \times \vec{w}|} = \frac{|(\vec{i} - 2\vec{j} - 4\vec{k}) \cdot (-4\vec{i} + 6\vec{j} + 2\vec{k})|}{\sqrt{56}}$$

$$= \frac{|-24|}{\sqrt{56}} = \frac{12}{\sqrt{14}} \quad (M1)(A1)$$

$$4. \text{ (i) (a) } A^2 = \begin{bmatrix} 2 & -1 \\ 1 & 0 \end{bmatrix}^2 = \begin{bmatrix} 3 & -2 \\ 2 & -1 \end{bmatrix} \quad (A1)$$

$$A^3 = \begin{bmatrix} 3 & -2 \\ 2 & -1 \end{bmatrix} \begin{bmatrix} 2 & -1 \\ 1 & 0 \end{bmatrix} = \begin{bmatrix} 4 & -3 \\ 3 & -2 \end{bmatrix} \quad (A1)$$

(b) Conjective: $A^n = \begin{bmatrix} n+1 & -n \\ n & -(n-1) \end{bmatrix}$ for all $n \in \mathbb{N}^*$ (A3) If all the 4 entries are correct, -1 for each error.

(c) Let $P(n)$ be the statement that

$$A^n = \begin{bmatrix} n+1 & -n \\ n & -(n-1) \end{bmatrix}$$

$P(1)$ is true because

$$A = \begin{bmatrix} 2 & -1 \\ 1 & 0 \end{bmatrix} \quad (C1)$$

Suppose $P(k)$ is true for some $k \in \mathbb{N}^*$. (M1)

Then

$$\begin{aligned} A^{k+1} &= A^k A = \begin{bmatrix} k+1 & -k \\ k & -(k-1) \end{bmatrix} \begin{bmatrix} 2 & -1 \\ 1 & 0 \end{bmatrix} \\ &= \begin{bmatrix} 2k+2-k & -(k+1) \\ 2k-(k-1) & -k \end{bmatrix} \\ &= \begin{bmatrix} (k+1)+1 & -(k+1) \\ k+1 & -((k+1)-1) \end{bmatrix} \quad (M1)(A1) \end{aligned}$$

Hence $P(k+1)$ is true.

By mathematical induction $P(n)$ is true for all $n \in \mathbb{N}^*$. (R1)

(ii) (a) Given $f(x) = \frac{ax+b}{cx^2+dx+e}$

$$f\left(-\frac{5}{2}\right) = 0 \text{ implies } \frac{-\frac{5}{2}a+b}{\frac{25}{4}c+\frac{5}{2}d+e} = 0$$

Hence

$$-\frac{5}{2}a+b=0 \dots\dots\dots(1)$$

Since $x = -1$ and $x = -4$ are asymptotes,
 $cx^2 + dx + e = (x+1)(x+4) = x^2 + 5x + 4$.

Hence

$$c=1, d=5 \text{ and } e=4.$$

Also $f(0) = \frac{5}{4}$ implies

$$\frac{b}{e} = \frac{5}{4} \text{ or } b = \frac{5e}{4}$$

Since $e=4, b=5$.

Using $b=5$ in (1), we get

$$-\frac{5}{2}a+5=0 \text{ or } a=2$$

Hence,

$$a=2, b=5, c=1, d=5 \text{ and } e=4$$

$$f\left(-\frac{5}{2}\right) = 0 \Rightarrow$$

$$\boxed{5a-2b=0}$$

$$f(0) = \frac{5}{4} \Rightarrow$$

$$\boxed{\frac{b}{e} = \frac{5}{4}} \quad M_1$$

$x = -4$ Asym.

$$\Rightarrow \boxed{16c-4d+e=0} \quad M_1$$

$x = -1$

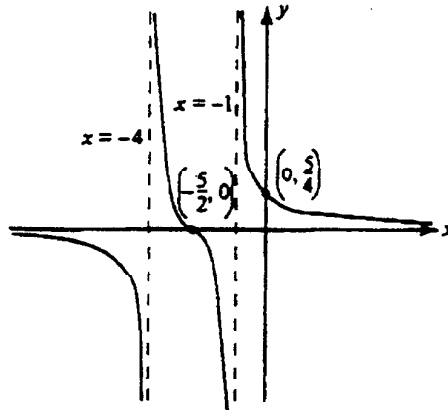
$$\Rightarrow \boxed{c-d+e=0}$$

$$\Rightarrow \begin{cases} a = 2t \\ b = 5t \\ c = t \\ d = 5t \\ e = 4t \end{cases}$$

M_1
 A_1

(M3)(A1)

- (b) Since $f'(x) < 0$ when $f(x)$ is decreasing, we see from the given graph of $f(x)$ that $f(x)$ is decreasing when $x < -4$, $-4 < x < -1$ and $x > -1$. Hence $f'(x) < 0$ when $x < -4$, $-4 < x < -1$ and $x > -1$. (A1)(A1)(A1)



Note: Some candidates may calculate $f'(x)$ and conclude

$$f'(x) = -\frac{2x^2 + 10x + 17}{(x^2 + 5x + 4)^2} \quad (M1)$$

Since $2x^2 + 10x + 17 > 0$ for all x , (M1)

$f'(x) < 0$ for all values of x for which $f(x)$ is defined viz.
 $x < -4$, $-4 < x < -1$, $-1 < x$. (R1)

(c)
$$f(x) = \frac{2x+5}{(x+4)(x+1)} = \frac{A}{x+4} + \frac{B}{x+1} = \frac{A(x+1) + B(x+4)}{(x+4)(x+1)}$$

$$(A+B)x + (A+4B) = 2x+5 \quad M_1$$

Thus, on equating coefficients of like powers of x ,

$$A+B=2 \text{ and } A+4B=5 \quad A_1$$

From these two equations, we get, $B=1$ and $A=1$. Hence

$$f(x) = \frac{1}{x+4} + \frac{1}{x+1} \dots\dots\dots(2) \quad A_1 \quad (M2)(A1)$$

$$(d) \quad f'(x) = -(x+4)^{-2} - (x+1)^{-2}$$

and

$$f''(x) = 2(x+4)^{-3} + 2(x+1)^{-3} \dots\dots\dots(3)$$

$$\text{When } x = -\frac{5}{2}, f''(x) = 2\left(-\frac{5}{2}+4\right)^{-3} + 2\left(-\frac{5}{2}+1\right)^{-3}$$

$$= 2\left(\frac{3}{2}\right)^{-3} + 2\left(-\frac{3}{2}\right)^{-3} = 0$$

Since $f'(x)$ is negative throughout $(-4, -1)$, $f''(x) = 0$ when $x = -\frac{5}{2}$, $f''(x)$

changes sign at $x = -\frac{5}{2}$. Hence $x = -\frac{5}{2}$ is a point of inflection. (M2)(R1)

$$(e) \quad f''(x) > 0 \text{ when } -4 < x < -\frac{5}{2} \text{ and } x > -1 \quad (A1)(A1)$$

Note: Some candidates may write $f''(x) > 0$ if

$$(x+1)(x+4)^4 + (x+1)^4(x+4) > 0$$

$$\text{i.e. } (x+1)(x+4)\{(x+4)^3 + (x+1)^3\} > 0$$

$$\text{i.e. } (x+1)(x+4)(2x+5)(x^2+5x+13) > 0$$

Since $x^2 + 5x + 13 > 0$ for all x ,

$$f''(x) > 0 \text{ when } -4 < x < -\frac{5}{2} \text{ or } x > -1$$

(M1)(A1)

SECTION B

Abstract Algebra

5. (i) $\mathbb{R}^* = \mathbb{R} - \{0\}$ and $a \# b = b|a|$

(a) Yes. \mathbb{R}^* is closed under the binary operation $\#$ since $a \# b = b|a| \in \mathbb{R}$ and when $a \neq 0$ $|a| \neq 0$, then $b \neq 0$, $\frac{b}{|a|} \neq 0$ imply $a \# b \neq 0$. Thus $a \# b \in \mathbb{R}^*$. (C1)(R1)

(b) Let $a, b, c \in \mathbb{R}^*$. Then $(a \# b) \# c = (b|a|) \# c = c|b|a| = c|b||a| = a \# (c|b|) = a \# (b \# c)$. Hence $\#$ is an associative binary operation on \mathbb{R}^* . (M1)(R1)

(c) If $k \in \mathbb{R}^*$ such that $k \# a = a$, then $a|k| = a$. Hence $|k| = 1$. Thus $k = -1$ or 1 . (M1)(R1).

(d) We want m so that $a \# m = 1$ or $a \# m = -1$. $a \# m = m|a|$ implies $m = \frac{1}{|a|}$ or $-\frac{1}{|a|}$. (M1)(R1)

(e) $(\mathbb{R}^*, \#)$ can not be a group because in that case there is an element $e \in \mathbb{R}^*$ so that $a \# e = e \# a = a$ for every $a \in \mathbb{R}^*$. But $a \# e = a$ implies $e|a| = a$ or $e = \frac{a}{|a|}$ which is not a constant. So we do not have an identity in \mathbb{R}^* and hence $(\mathbb{R}^*, \#)$ is not a group. [no unique identity] (M1)(A1)

(f) $S = \{x \in \mathbb{R} \mid x < 0\}$ and $a \# b = b|a| < 0$ for all $a, b \in S$.
So $\#$ is a closed binary operation. Also for all $a, b, c \in S$.

$$(a \# b) \# c = (b|a|) \# c = c|b|a| = c|b||a| = a \# (c|b|) = a \# (b \# c).$$

Thus $\#$ is an associative binary operation on S . (R1)

-1 is the identity, since for any $a \in S$, $a \# (-1) = (-1)|a| = a$ and $(-1) \# a = a|(-1)| = a$. (R1)

Corresponding to each $a \in S$ there is $-\frac{1}{|a|} \in S$, so that $a \# \left(-\frac{1}{|a|}\right) = \left(-\frac{1}{|a|}\right) \# a = -1$.

Hence $-\frac{1}{|a|}$ is the inverse of a . (R1)

- (ii) (a) $a \bullet b = a \bullet c$ implies $a^{-1} \bullet (a \bullet b) = a^{-1} \bullet (a \bullet c)$.

By associativity, we have

$$(a^{-1} \bullet a) \bullet b = (a^{-1} \bullet a) \bullet c$$

$$\text{or } e \bullet b = e \bullet c$$

or $b = c$, where e is the identity element of (G, \bullet) .

(M2)(A2)

- (b) Let e, e' be two identities (if possible) in (G, \bullet) .

From $a \bullet e = a = a \bullet e'$, we get $e = e'$,

(M2)(R1)

so identity is unique.

Remark: Some candidates may attempt the problem as follows:

$$e = e \bullet e' = e' \text{ implies } e = e'$$

Award (M2)(R1)

- (c) Suppose, for some $a \in G$, there are two inverses viz. a^{-1} and b . Then $a \bullet a^{-1} = e = a \bullet b$. By cancellation law $a^{-1} = b$. Hence each element of the group G has exactly one inverse. (M2)(R1)
- (iii) (a) A group (G, \bullet) is said to be cyclic if there exists an element $a \in (G, \bullet)$ such that $G = \{a^n \mid n \in \mathbb{Z}\}$. The element a is called a generator. (C2)(C2)
- (b) By the structure of the Cayley table given for $(H, *)$, $*$ is a closed binary operation on H . a is the identity. Each element of H has an inverse as mentioned below:

Element of H	Inverse
a	a
b	d
c	c
d	b

Since $*$ is given to be associative, $(H, *)$ is a group.

(M2)(A1)

$$b^0 = a, b^1 = b, b^2 = c, b^3 = d \text{ and } b^4 = a$$

Thus $(H, *)$ is a cyclic group with a generator b .

(M1)(A1)

- (c) One can, in a similar manner, show that d is a generator for the cyclic group $(H, *)$, since

$$d^1 = d, d^2 = c, d^3 = b \text{ and } d^4 = a.$$

So the two generators are b and d .

(M1)(A1)

- (d) The subgroups of $(H, *)$ are $\{a\}$, $\{a, c\}$ and H .

The proper subgroups of $(H, *)$ are ~~$\{a\}$~~ and $\{a, c\}$.

$\left. \begin{array}{l} (M2) \\ (R1) \end{array} \right\}$

- (e) $(H, *)$ can not have any subgroup of order 3 because Lagrange's theorem requires that the order of a subgroup divides the order of a group and $(H, *)$ is a group of order four.

(M2)(R1)

Remark: Some candidates may mention that by Lagrange's theorem $(H, *)$ can only have subgroups of order 1, 2 or 4. Hence, $(H, *)$ can not have any subgroup of order 3.

(M2)(R1)

Graph Theory

6. (i) (a) Adjacency matrix is given by

$$A = \begin{matrix} & \begin{matrix} v_1 & v_2 & v_3 & v_4 \end{matrix} \\ \begin{matrix} v_1 \\ v_2 \\ v_3 \\ v_4 \end{matrix} & \begin{bmatrix} 0 & 2 & 1 & 0 \\ 2 & 1 & 1 & 0 \\ 1 & 1 & 1 & 1 \\ 0 & 0 & 1 & 0 \end{bmatrix} \end{matrix} \quad (M1)(A2)$$

-1 for two mistakes.

- (b) Incidence matrix is given by

$$B = \begin{matrix} & \begin{matrix} e_1 & e_2 & e_3 & e_4 & e_5 & e_6 & e_7 \end{matrix} \\ \begin{matrix} v_1 \\ v_2 \\ v_3 \\ v_4 \end{matrix} & \begin{bmatrix} 1 & 1 & 1 & 0 & 0 & 0 & 0 \\ 0 & 1 & 1 & 1 & 1 & 0 & 0 \\ 1 & 0 & 0 & 0 & 1 & 1 & 1 \\ 0 & 0 & 0 & 0 & 0 & 0 & 1 \end{bmatrix} \end{matrix} \quad (M1)(A2)$$

-1 for two errors.

- (c) To determine the number of ways to go from
- v_1
- to
- v_2
- traversing exactly four edges, we compute
- A^4
- and select the (1, 2) entry.

$$A^4 = \begin{bmatrix} 44 & 46 & 40 & 12 \\ 46 & 62 & 50 & 14 \\ 40 & 50 & 42 & 12 \\ 12 & 14 & 12 & 4 \end{bmatrix} \quad (M2)(A2)$$

Since (1, 2) entry is 46, there are 46 different ways to go from v_1 to v_2 in the required manner.

- (d) Let
- $G = (V, E)$
- be an undirected graph or multigraph with no isolated points.
- G
- is said to have an Eulerian circuit if there is a circuit in
- G
- that traverses every edge of the graph exactly once. (A2)

The above graph does not contain an Eulerian circuit because the vertex v_1 has degree 3. (R1)

Note that if $G = (V, E)$ is an undirected connected graph with an Eulerian circuit then every vertex has an even degree. (R1) ?

Note: Some candidates may write the following:

The graph does not contain an Eulerian circuit since not all vertices have even degree. Some may say that e_7 makes it impossible to have an Eulerian circuit.

Award (R2)

- (e) If in a graph G there exists a closed circuit which passes exactly once through each vertex of G , then such a circuit is called a Hamiltonian circuit. (A2)

Since no closed circuit contains v_4 the graph does not contain a Hamiltonian circuit. (R1)

- (ii) Prim's algorithm requires that we start at the vertex A and consider it as a tree and then look for the shortest path that joins a vertex on this tree to any of the remaining vertices to obtain a minimal spanning tree. We make choices, choose corresponding edges to be added and keep track of the weights.

Choice	Edge	Weight
1	AH	3
2	HB	1
3	HC	2
4	HD	2
5	DE	4
6	EF	2
7	FG	8
Total weight		22

(M3)(A3)

-1 for each error.

Note: Some candidates may only mention:

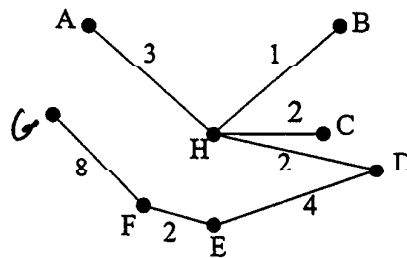
Starting at A and using Prim's algorithm $AH + HB + HC + HD + DE + EF + FG$

yields $3 + 1 + 2 + 2 + 4 + 2 + 8 = 22$.

Award (M3)(A3).

-1 for each error.

The network looks like

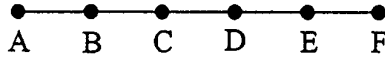


(A2)

- (iii) (a) Each edge of a graph is incident on two vertices and thereby contributes two to the sum of the degree of the vertices.
If a graph has n edges then the sum of the degrees of the vertices is $2n$. (M2)(A1)

- (b) The sum of the degrees in the degree sequence $\{3, 3, 2, 2, 2, 2, 2, 1\}$ is 19. Since it is an odd number there can not be any graph with the given degree sequence as the degree of the vertices. (M1)(A1)

On the other hand the graph



(A1)

corresponds to the degree sequence $\{2, 2, 2, 2, 1, 1\}$. Note that degree of $A =$ degree of $F = 1$ and degree of $B =$ degree of $C =$ degree of $D =$ degree of E . (A1)

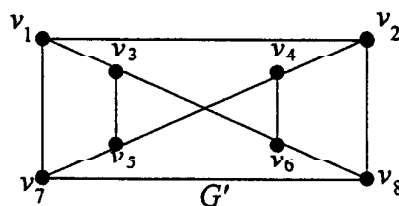
- (iv) (a) Two graphs $G_1 = (V_1, E_1)$, $G_2 = (V_2, E_2)$ are isomorphic if there is a one to one and onto map $\varphi: V_1 \rightarrow V_2$ such that $a, b \in V_1$ are adjacent if and only if $\varphi(a)$ and $\varphi(b)$ are adjacent. (A3)

Remark: Some candidates may write an isomorphism between two graphs is a one to one and onto mapping between vertices so that it preserves adjacency and incidence.

a 1-1 correspondence.

- (b) Let $G_1 = (V_1, E_1)$ and $G_2 = (V_2, E_2)$ be isomorphic with an isomorphism φ . Let $v_1, v_2, \dots, v_k, v_1$ be a cycle of length k in G_1 with $v_i \in V_1$, $1 \leq i \leq k$. Then, by the isomorphism, $\varphi(v_1), \varphi(v_2), \dots, \varphi(v_k), \varphi(v_1)$ (M2)(R1) is a cycle of length k since $\varphi(v_{i-1})$ is adjacent to $\varphi(v_i)$, $2 \leq i \leq k$ and $\varphi(v_k)$ is adjacent to $\varphi(v_1)$.

- (c) If G and G' were isomorphic and one of them has a cycle of length k then the other must have a cycle of length k .



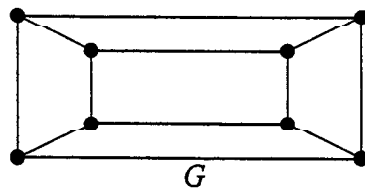
G' has a cycle of length 5 which is given by

$v_1, v_3, v_6, v_8, v_2, v_1$

(M2)

But G has no cycle of length 5. So G and G' are not isomorphic.

(R1)



Statistics

7. (i) One unit of time is one minute. On a weekday morning a switch board receives 25 calls during a five minute period so λ , the number of calls per minute, is 5.

- (a) The probability that a switch board receives zero telephone calls between 10.31 and 10.32 next Thursday morning is

$$e^{-5} \frac{5^0}{0!} = e^{-5} = 0.00674$$

So the probability that the switch board receives at least one telephone call is

$$1 - e^{-5} = 0.993. \quad (M2)(A1)$$

Remark: The answer may be given as $1 - e^{-5}$

- (b) The probability that the switch board receives at least two or three telephone calls between 10.31 and 10.32 next Thursday morning is

$$e^{-5} \frac{5^2}{2!} + e^{-5} \frac{5^3}{3!} = e^{-5} \left[\frac{25}{2} + \frac{125}{6} \right]$$

$$= e^{-5} \left[\frac{200}{6} \right] = \frac{100}{3} e^{-5} \approx 0.225 \quad (M2)(A1)$$

(ii) Let us set up the following hypothesis:

H_0 : Proportion of students failed by X, Y and Z are equal

H_1 : Proportion of students failed by X, Y and Z are not equal (C1)(C1)

If H_0 were true, then the teachers would have failed $\frac{27}{180} = 15\%$ of students and would have passed 85% of students.

Hence the expected frequencies are given by the following table:

EXPECTED FREQUENCIES				
	X	Y	Z	Total
Passed	46.75	51.85	54.4	153
Failed	8.25	9.15	9.6	27
Total	55	61	64	180

(M2)(A2)

ν , the number of degrees of freedom is given by $\nu = (2 - 1)(3 - 1) = 2$.

$$\chi^2 = \frac{(50 - 46.75)^2}{46.75} + \frac{(47 - 51.85)^2}{51.85} + \frac{(56 - 54.40)^2}{54.40} + \frac{(5 - 8.25)^2}{8.25} + \frac{(14 - 9.15)^2}{9.15} + \frac{(8 - 9.60)^2}{9.60}$$

$$= 4.84 \quad (M2)(A2)$$

At 10% level of significance $\chi^2 = 4.61$.

Since $4.84 > 4.61$, the critical value corresponding to a probability of 0.1, we reject the null hypothesis. (M1)(R1)

At 5% level of significance $\chi^2 = 5.99$. Since $4.84 < 5.99$, we can not reject the null hypothesis. (M1)(R1)

(iii) Let μ be the mean thickness of the washers.

H_0 : $\mu = 0.50$ and the machine is in proper working order.

H_1 : $\mu \neq 0.50$ and the machine is not in proper working order. (C1)(C1)

We need a two tailed small sample test. Under H_0 ,

$$t = \frac{\bar{x} - \mu}{s/\sqrt{N-1}} = \left(\frac{0.53 - 0.50}{0.03} \right) \sqrt{10-1} = 3 \quad \text{also } t = 3.1622 \quad (M2)(A2)$$

We accept H_0 if t is between $-t_{.975}$ to $t_{.975}$ with $10 - 1 = 9$ degrees of freedom. Thus, we accept H_0 if t is between -2.26 and 2.26 . (M1A1)

Since calculated t value is 3, we reject H_0 . (M1)(R1)

SECOND METHOD

$H_0: \mu = 0.50$, machine is in working order. (C1)

$H_1: \mu \neq 0.50$, machine is faulty. (C1)

Sample size is 10. So estimate for population standard deviation is $\left(\sqrt{\frac{10}{9}}\right)0.03$.

Hence, means of sample size 10 have a t -distribution with standard deviation

$$\left(\sqrt{\frac{10}{9}} \times 0.03\right) \frac{1}{\sqrt{10}} = 0.01. \quad (M2)(A2)$$

Critical values at 5% level under H_0 are

$$0.50 \pm (2.262)(0.01) \quad (\nu = 9)$$

$$\text{i.e. } 0.50 \pm 0.0226 \quad (M1)(A1)$$

The observed value is outside this interval, so we reject the claim. (M1)(R1)

(iv) (a) The 95% confidence limits are

$$\hat{p} \pm z \sqrt{\frac{\hat{p}(1-\hat{p})}{N}} \quad (N = \text{sample size})$$

we have $\hat{p} = 0.55$, $z = 1.96$ (for 95% confidence level) and $N = 100$.

So the confidence interval is given by

$$\begin{aligned} & 0.55 \pm 1.96 \sqrt{\frac{(0.55)(0.45)}{100}} \\ & = 0.55 \pm 0.098 \end{aligned} \quad (M2)(A1)$$

So the confidence interval is [0.452, 0.648] (A1)

(b) Let N be the required sample size. We want N to be such that

$$0.50 < \hat{p} - z \sqrt{\frac{\hat{p}(1-\hat{p})}{N}} \quad (M1)(A1)$$

where $\hat{p} = 0.55$ and z (for 95% confidence) = 1.96.

So we want

$$\frac{50 - \hat{p}}{-z} > \sqrt{\frac{\hat{p}(1-\hat{p})}{N}}$$

$$\text{Thus } \sqrt{N} > \frac{z}{\hat{p} - 0.50} \sqrt{\hat{p}(1-\hat{p})}. \quad (M1)(A1)$$

Substitute $\hat{p} = 0.55$, $z = 1.96$ to get

$$\begin{aligned} N & > \left(\frac{1.96}{0.55 - 0.50} \right)^2 \sqrt{(0.55)(0.45)} \\ & = 380.3184. \end{aligned} \quad (M1)$$

\therefore sample size required is at least 381. (R1)

Analysis and Approximation

8. (i) (a) The interval $[0, 1]$ is divided into four sub-intervals. The trapezium rule approximation of $\int_0^1 e^{x^2} dx$ is given by

$$\begin{aligned} & \frac{1-0}{(2)(4)} \left\{ f(0) + 2f\left(\frac{1}{4}\right) + 2f\left(\frac{2}{4}\right) + 2f\left(\frac{3}{4}\right) + f(1) \right\} \\ &= \frac{1}{8} \{1 + 2e^{1/16} + 2e^{1/4} + 2e^{9/16} + e\} = 1.49 \end{aligned} \quad (M2)(A2)$$

- (b) The error E_n in the trapezium rule approximation is given by

$$E_n = -\frac{(b-a)^3}{12n^2} f''(c) \text{ where } c \text{ is a point in } [a, b] \text{ and } n \text{ is the number of sub intervals. In our case, } n=4, a=0, b=1.$$

$$E_4 = -\frac{1}{(12)(16)} \left(\left(\frac{d}{dx} \right)^2 e^{x^2} \right)_{x=c} \quad (A1)$$

Where c is such that $0 < c < 1$.

$$\text{If } f(x) = e^{x^2}, f'(x) = 2xe^{x^2} \text{ and } f''(x) = 2e^{x^2} + (2x)^2 e^{x^2} = (2 + 4x^2)e^{x^2}$$

$$\text{Hence, } f''(c) = (2 + 4c^2)e^{c^2}$$

Since $f''(c)$ is positive and increasing over $[0, 1]$, $0 < f''(c) \leq (2 + 4)e = 6e$.

$$\text{Hence } |E_4| \leq \frac{6e}{(12)(16)} = \frac{e}{32} = 0.085 \quad (M2)(A1)$$

- (ii) (a) Set $u_k = k \left(\frac{1}{2} \right)^k$. Then $u_{k+1} = \frac{k+1}{2^{k+1}}$

$$\lim_{k \rightarrow \infty} \frac{u_{k+1}}{u_k} = \lim_{k \rightarrow \infty} \frac{1}{2} \left(\frac{k+1}{k} \right) = \frac{1}{2} \quad (M2)(A1)$$

Since $0 < \frac{1}{2} < 1$, the series $\sum_{k=1}^{\infty} k \left(\frac{1}{2} \right)^k$ converges by ratio test. (R1)

Remark: Some candidates may use root test.

(b) Set $f(x) = \frac{10}{x \ln x}$, $x \geq 2$.

$f(x)$ is positive and continuous on $[2, \infty)$. Also $f(x)$ decreasing with the fact that

$$f(k) = a_k = \frac{10}{k \ln k}, \quad k = 2, 3, \dots \quad (M1)$$

By integral test the series $\sum_{k=2}^{\infty} \frac{10}{k \ln k}$ and the integral $\int_2^{\infty} \frac{10}{x \ln x} dx$ converge or diverge together.

Since,

$$\int_2^{\infty} \frac{dx}{x \ln x} = \lim_{R \rightarrow \infty} (\ln \ln x) \Big|_2^R = \infty \quad (M1)(A1)$$

the series diverges. (R1)

(c) $\sum_{k=1}^{\infty} (-1)^k \frac{k}{k^2 + 1}$ is an alternating series.

Let us write it as $\sum_{k=1}^{\infty} (-1)^k u_k$ where $u_k = \frac{k}{k^2 + 1}$, $k = 1, 2, \dots$.

If we wrote $u(x) = \frac{x}{x^2 + 1}$, then $u'(x) = \frac{(x^2 + 1) - 2x^2}{(x^2 + 1)^2} = \frac{1 - x^2}{(x^2 + 1)^2} < 0$ for $x \geq 2$.

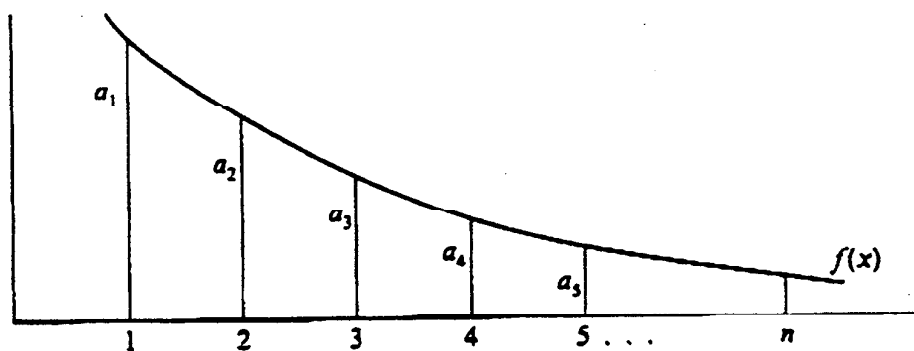
Hence $u(x)$ is a decreasing function and consequently u_k is a decreasing sequence for $k = 2, 3, \dots$

Also $\lim_{k \rightarrow \infty} u_k = \lim_{k \rightarrow \infty} \frac{k}{k^2 + 1} = 0$ (M2)(A1)

Hence, by alternating series test, the series $\sum_{k=1}^{\infty} (-1)^k \frac{k}{k^2 + 1}$ is a convergent series.

(R1)

(iii)(a)



$f(x)$ is a decreasing function over $[1, \infty)$. Further, we have $f(n) = a_n, n \geq 1$. Hence, $a_{i-1} \geq f(x) \geq a_i$ for $x \in [i-1, i]; i \geq 2$.

$$\text{Thus } \int_{i-1}^i a_{i-1} dx \geq \int_{i-1}^i f(x) dx \geq \int_{i-1}^i a_i dx, \quad i \geq 2$$

$$\text{or } a_{i-1} \geq \int_{i-1}^i f(x) dx \geq a_i, \quad i \geq 2 \quad (M1)(A1)$$

$$\sum_{i=2}^n a_{i-1} \geq \sum_{i=2}^n \int_{i-1}^i f(x) dx \geq \sum_{i=2}^n a_i$$

$$\text{or } a_1 + a_2 + \dots + a_{n-1} \geq \int_1^n f(x) dx \geq a_2 + a_3 + \dots + a_n$$

$$\text{or } a_2 + \dots + a_n \leq \int_1^n f(x) dx \leq a_1 + a_2 + \dots + a_{n-1} \quad (M1)(A1)$$

(b) From (a)

$$a_1 + a_2 + \dots + a_n \leq a_1 + \int_1^n f(x) dx$$

and writing $s_n = a_1 + a_2 + \dots + a_n$, we have

$$s_n \leq \int_1^n f(x) dx + a_1$$

Also, from part (a),

$$\int_1^n f(x) dx \leq a_1 + a_2 + \dots + a_{n-1} = s_{n-1}$$

Hence,

$$\int_1^n f(x) dx \leq s_{n-1} + a_n = s_n$$

Since $a_n \geq 0$.

Thus

$$\int_1^n f(x) dx \leq s_n \leq \int_1^n f(x) dx + a_1 \quad (M2)(R1)$$

If we take $f(x) = \frac{1}{x}$

$$\int_1^n \frac{dx}{x} \leq \sum_{n=1}^n \frac{1}{n} \leq \int_1^n \frac{dx}{x} + 1 \quad (M1)$$

But

$$\int_1^n \frac{dx}{x} = \ln n - \ln 1 = \ln n \quad (A1)$$

Hence

$$\ln n \leq \sum_{n=1}^n \frac{1}{n} < \ln n + 1$$

When $n = 10\,000$, $\ln n = 9.2103$ and we get

$$9.21 < \sum_{n=1}^{10000} \frac{1}{n} < 10.21$$

Thus the sum of the series $\sum_{n=1}^{10000} \frac{1}{n}$ is in the interval $[9.21, 10.21]$ (M2)(A1)

(iv) By the mean value theorem for any $x \in (3, 7)$ there is some c , $3 < c < x$, such that

$$\frac{f(x) - f(3)}{x - 3} = f'(c). \quad (M1)$$

But $|f'(x)| \leq 4$. Hence,

$$\left| \frac{f(x) - f(3)}{x - 3} \right| = |f'(c)| \leq 4 \quad (A1)$$

Thus,

$$|f(x) - f(3)| \leq 4|x - 3| \leq 16 \quad (M1)(A1)$$

From this, we conclude that

$$f(3) - 16 \leq f(x) \leq f(3) + 16$$

Substituting $f(3) = -16$, we get

$$-32 \leq f(x) \leq 0 \text{ for } 3 \leq x \leq 7 \quad (M2)(A2)$$