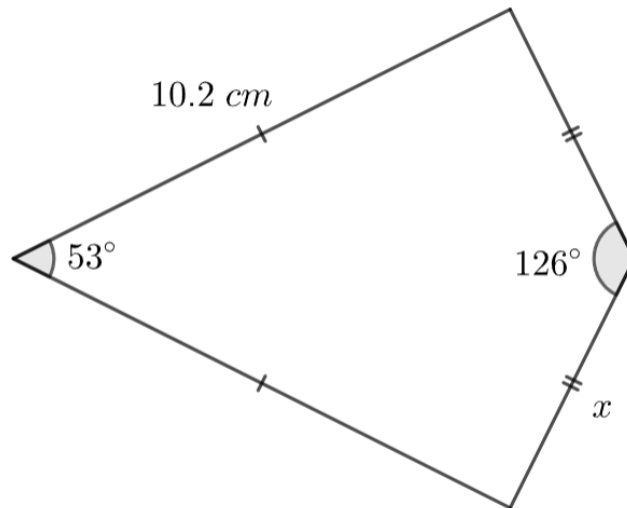


Name:  
Group 1  
Result:

1. Find the value of  $x$  in the figure below.

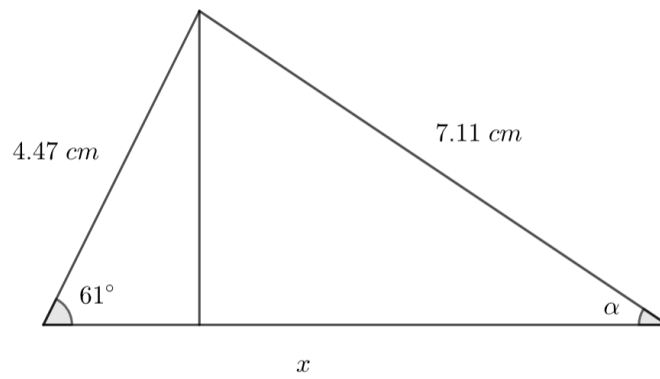
(3 points)



*Figure not to scale.*

2. Find the value of  $x$  and  $\alpha$  in the figure below.

(4 points)



*Figure not to scale.*

3. Find the value of  $x$  and  $\alpha$  in the figure below.

(5 points)




Figure not to scale.